




# 2024



## Solstråle 1.-3. trinn



Løysingsord: \_\_\_\_\_



Matematikk.org



MATEMATIKKSENTERET  
Nasjonalt senter for matematikk i opplæringen




OFFSHORE NORGE






# Oppgåve 1



14 barn leikar gjemsel i skogen.




**Kor mange barn har gøymt seg så godt at vi ikkje ser dei?**

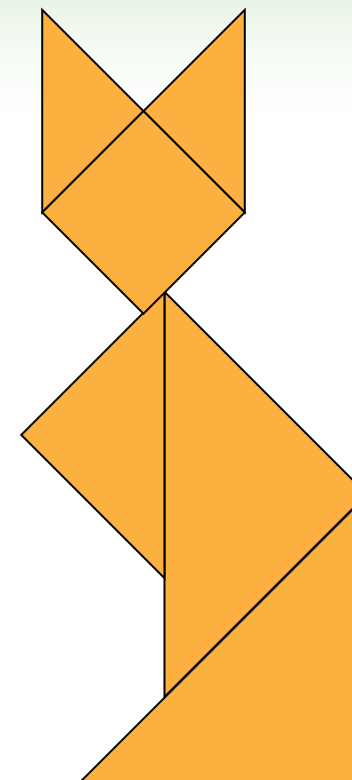

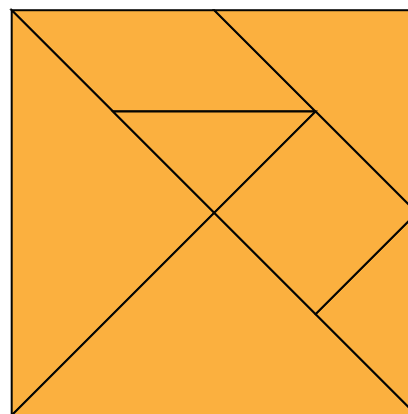
4	5	8	9	10
F	A	E	M	T



# Opppgåve 2




Lilly har eit tangram.  
Ho puslar bitane til ein katt.




**Kva for ein bit må ho bruke som hale til katten?**




A



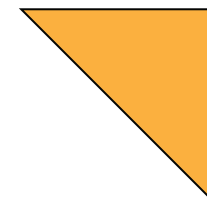
I



T




R



E



# Oppgåve 3



I kvar bolle er det fire ballar med tal.



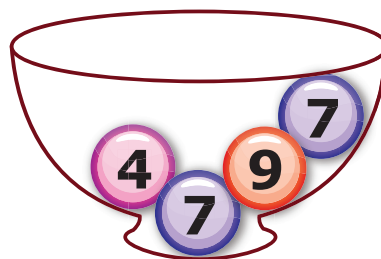
**I kva for ein bolle er summen størst?**



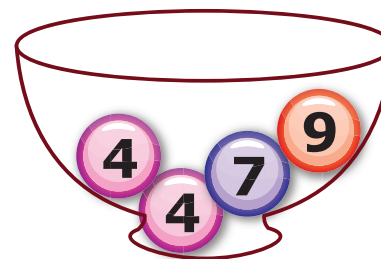
R



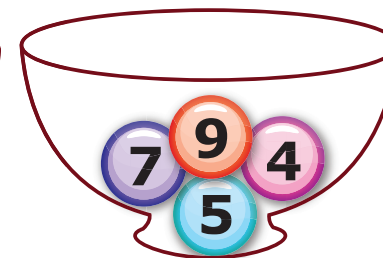
P



S




H



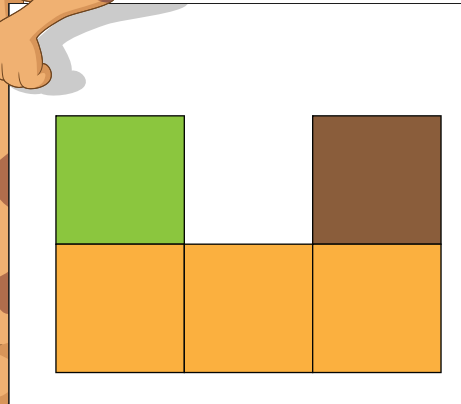
A



# Oppgåve 4



På biletet ser du fem kubar sett frå sida.



**Korleis ser kubane ut ovanfrå?**



R

I


E

G


M



# Oppgåve 5



Lukas skal fargeleggje alle rutene i to rader.  
Deretter skal han fargeleggje alle rutene i to kolonnar.





**Kor mange ruter blir ikkje fargelagde?**

8	10	12	18	22
N	A	H	Ø	B



# Oppgåve 6



**Kva for eit ansikt finst berre éin gong?**



E



D



Ø




F



P




# Opppgåve 7



I ein dyrehage er det både kamelar og dromedarar.  
Det er til saman 10 dyr.  
Kamelane og dromedarane har til saman 14 puklar.



kamel



dromedar


**Kor mange av dyra er dromedarar?**

2	4	5	6	8
U	G	E	N	D






# Oppgåve 8




Sofie og Jonas skal dekorere ein sommarfugl:




Dei skal bruke desse klistremerka:




**Kva for ein sommarfugl kan dei lage?**




T




P



E



V



S