



Julekalender 1.-4. trinn
Lett



www.matematikk.org




Løsningsord: _____


OPPGAVE 1




Hvor er pakken med sykkelen?



G



J


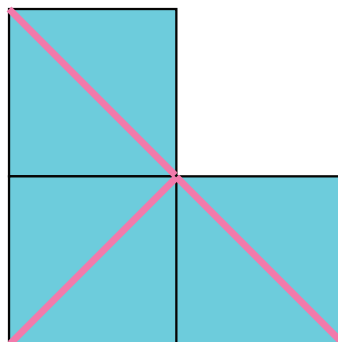


K

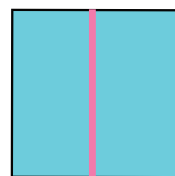
OPPGAVE 2



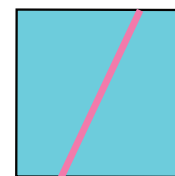
Hvilken brikke mangler?



O



L




M

OPPGAVE 3



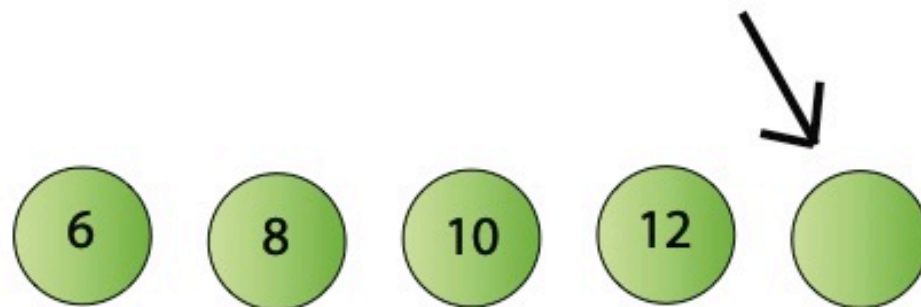
Hvor mange julegodterier samler ugla på den riktige veien gjennom labyrinten?



MÅL

3	5	7
Å	P	S

Hvilket tall skal stå her?



13	14	16
R	E	T

OPPGAVE 5



Hvilket tall skal stå i  ?


$$2 + \text{} = 7$$

5	6	7
B	A	G

OPPGAVE 6



Hvor mange firkanter kan du finne?



5	6	7
N	M	P



Bussjåføren starter turen alene i bussen.



3 går på bussen.



2 går på bussen.



4 går av bussen.

Hvor mange er
på bussen nå?

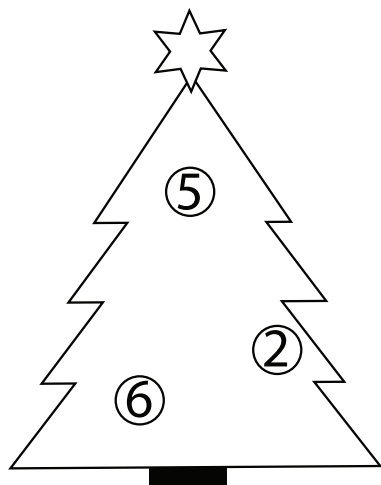
1	2	3
Q	S	V

Husk bussjåføren.

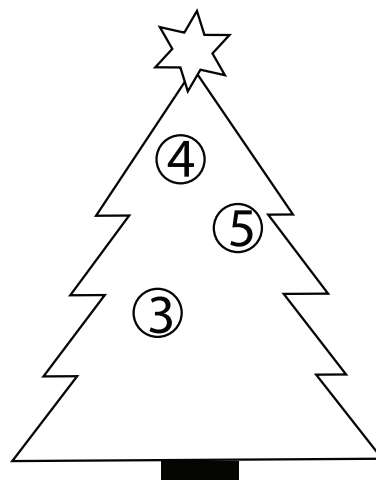
OPPGAVE 8




Hvilke kuler blir 14 tilsammen?
Finn det riktige treet.



D



H





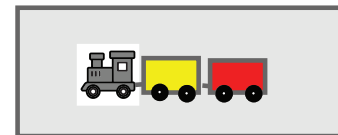
N

OPPGAVE 9



Du har rød og gul maling.
Hvor mange forskjellige tog kan du male?

Vognene skal bare ha en farge hver.
Et lokomotiv har alltid to vogner.



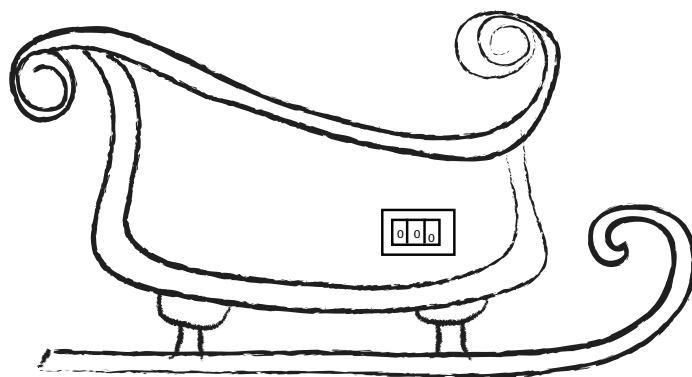
2	4	6
B	A	F

OPPGAVE 10



Julenissen har låst sleden sin med en kodelås.
Han har glemt tallene i koden.
Kan du hjelpe han?

Første sifferet er 1 mindre enn 5.
Andre sifferet er 2 større enn 7.
Tredje sifferet er det dobbelte av det første.



5	7	2
---	---	---

Z

6	5	3
---	---	---

F

4	9	8
---	---	---

E