


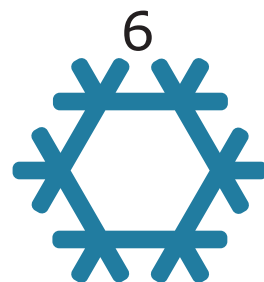

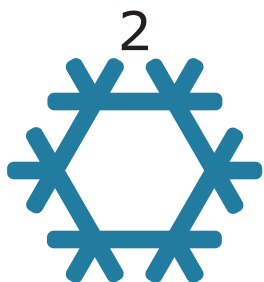



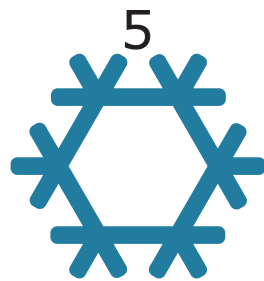






Julekalender: Kringle




Løysingsord: _____



MATEMATIKKSENTERET
Nasjonalt senter for matematikk i opplæringen



Matematikk.org



OFFSHORE NORGE



10 barn leikar i snøen.

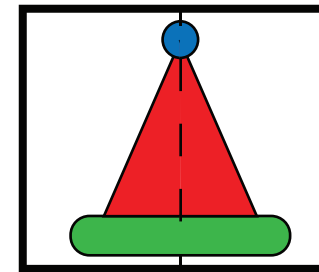


Kor mange barn er inne i snøhola?

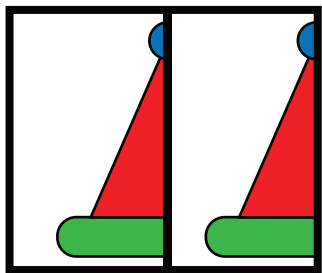
4	5	6	10
O	N	M	P



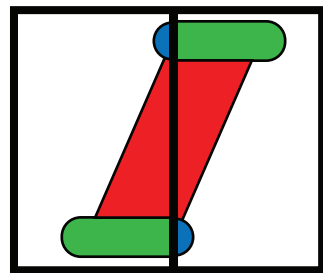
Nisse guten klipper eit bilete i to.
Han set delane saman på nytt.



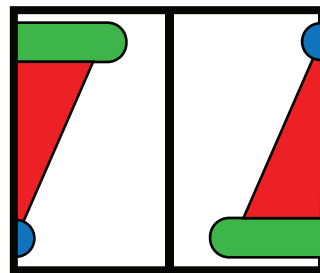
Kva for eit bilete viser dei to delane av biletet til nisse guten?



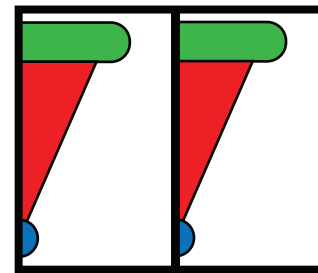
B



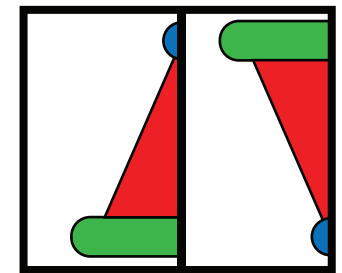
G



U



V



E



Kor mange sirklar ser du på biletet?

5	9	11	12
H	Y	L	D




Nissejenta sin båt har:


- meir enn éin sirkel
- to fleire trekantar enn kvadrat



Kva for ein båt er nissejenta sin?




L



B



N



I



Ø



Nisseemor har bursdag.

Eit stort lys betyr 10 år.
Eit lite lys betyr 1 år.




Kor mange år blir nisseemor?

12 år	57 år	75 år	120 år
J	N	S	V



Rudolf har fem myntar.
Summen av myntane er 21.










Kva verdi har éin sølvmynt?

3	4	5	9
E	B	L	P



Det skal vere to gåver i kvar rad og i kvar kolonne.

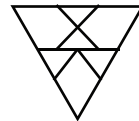
			D
		A	
		C	
B			

Kvar må den siste gåva vere?

A	B	C	D
H	F	R	Æ




Rudolf har laga 6 like trekantar:



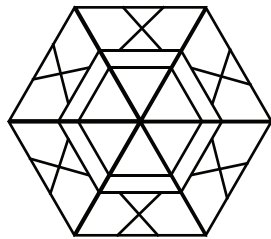
Han sette dei 6 trekantane saman til ein sekskant.



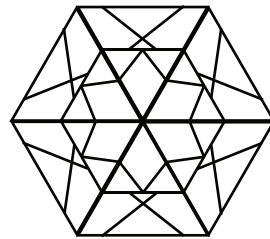
Korleis vil sekskanten til Rudolf sjå ut?




U



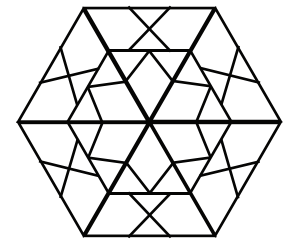
B



N






H



K



Julenissen har 19 eple i sekken sin.
Han legg nokre av epla i skåler.



Kor mange eple ligg igjen i sekken til julenissen?

5	6	7	13
J	A	L	Ø



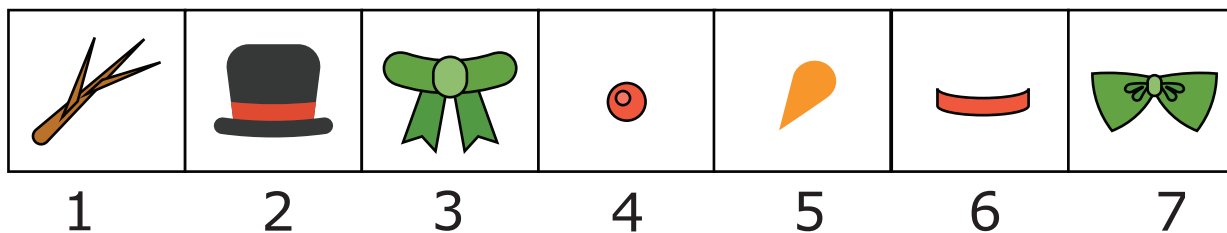
Julenissen lagar ein snømann som skal sjå slik ut til slutt:



Til no har han laga dette:



Kva for delar manglar julenissen for å gjere snømannen ferdig?



1, 2, 3, 4	1, 3, 4, 6	2, 3, 4, 6	1, 2, 5, 6
Y	K	G	J



Maja får alltid ugler til bursdagen sin.
Då ho fylte eitt år, fekk ho éi ugle.

For kvar nye bursdag, fekk ho éi ugle meir enn året før.



Kor mange ugler har Maja fått til saman etter at ho hadde fylt 9 år?

9	17	45	55
J	O	E	P

