

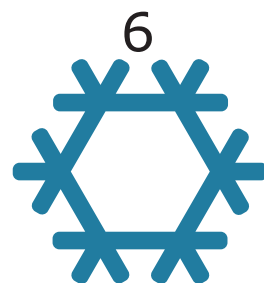
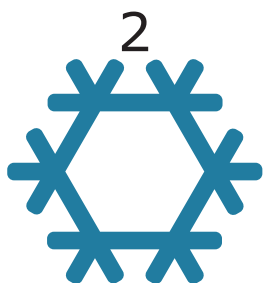


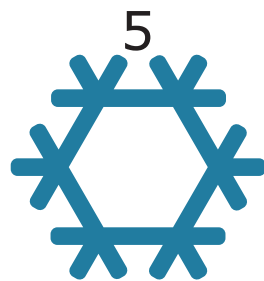






Julekalender: Kringle



Løsningsord: _____



10 barn leker i snøen.

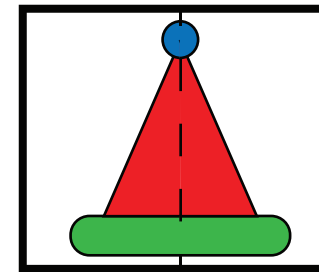


Hvor mange barn er inne i snøhula?

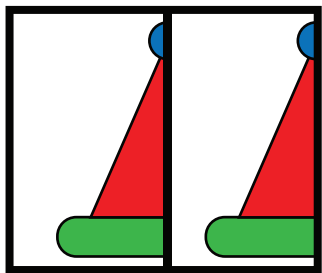
4	5	6	10
O	N	M	P



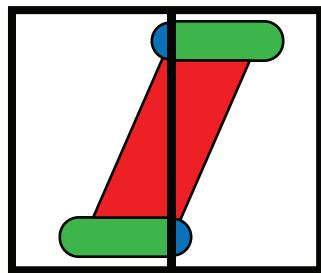
Nissegutten klipper et bilde i to.
Han setter delene sammen på nytt.



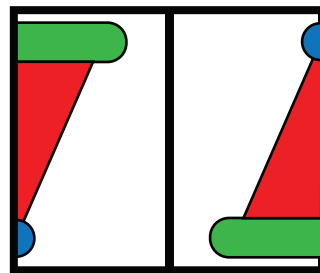
Hvilket bilde viser de to delene av bildet til nissegutten?



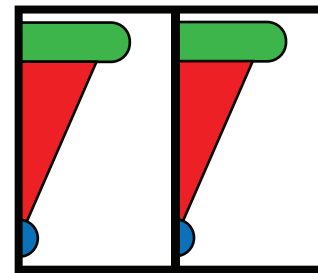
B



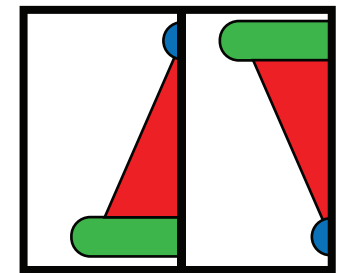
G



U



V



E



Hvor mange sirkler ser du på bildet?

5	9	11	12
H	Y	L	D



Nissejenta sin båt har:


- mer enn én sirkel
- to flere trekanter enn kvadrat



Hvilken båt er nissejenta sin?



L



B



N



I



Ø



Nisseemor har bursdag.

Et stort lys betyr 10 år.
Et lite lys betyr 1 år.




Hvor mange år blir nisseemor?

12 år	57 år	75 år	120 år
J	N	S	V



Rudolf har fem mynter.
Summen av myntene er 21.










Hvilken verdi har én sølvmynt?

3	4	5	9
E	B	L	P



Det skal være to gaver i hver rad og i hver kolonne.

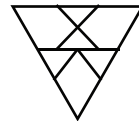
			D
		A	
		C	
B			

Hvor må den siste gaven være?

A	B	C	D
H	F	R	Æ




Rudolf har laget 6 like trekkanter:



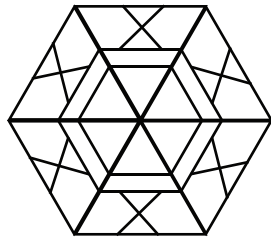
Han satte de 6 trekantene sammen til en sekskant.



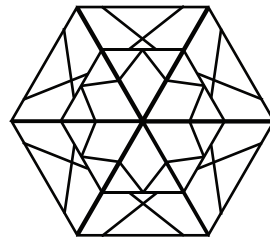
Hvordan vil sekskanten til Rudolf se ut?




U



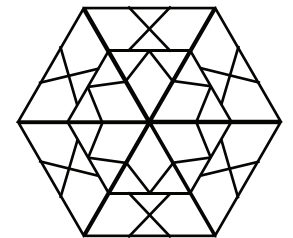
B



N






H



K



Julenissen har 19 epler i sekken sin.
Han legger noen av eplene i skåler.



Hvor mange epler ligger igjen i sekken til julenissen?

5	6	7	13
J	A	L	Ø



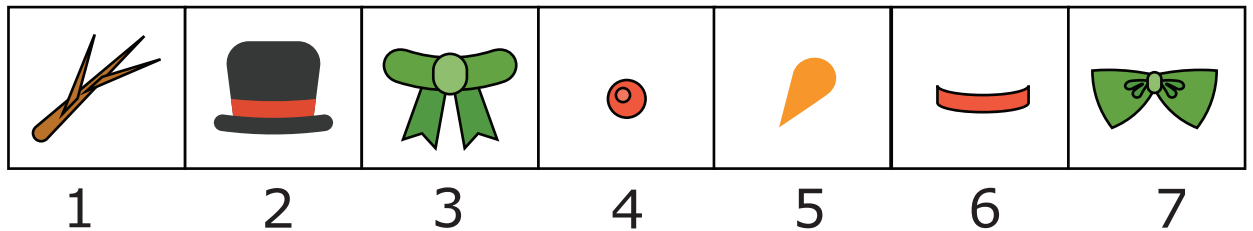
Julenissen lager en snømann som skal se slik ut til slutt:




Til nå har han laget dette:



Hvilke deler mangler julenissen for å gjøre snømannen ferdig?



1, 2, 3, 4	1, 3, 4, 6	2, 3, 4, 6	1, 2, 5, 6
Y	K	G	J



Maja får alltid ugler til bursdagen sin.
Da hun fylte ett år, fikk hun én ugle.

For hver nye bursdag, fikk hun én ugle mer enn året før.



Hvor mange ugler har Maja fått til sammen etter at hun hadde fylt 9 år?

9	17	45	55
J	O	E	P

