




2022



Solstråle 1.-3. trinn



Løsningsord: _____



Matematikk.org




MATEMATIKKSENTERET
Nasjonalt senter for matematikk i opplæringen



Norsk olje&gass




Oppgave 1

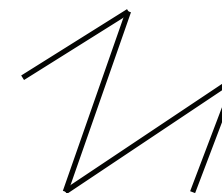

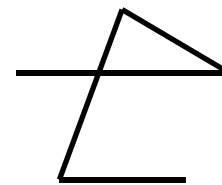

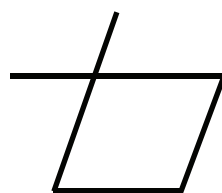
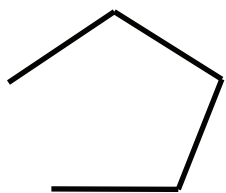

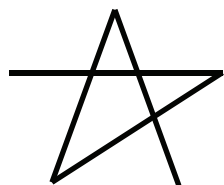


Tegn en sammenhengende strek mellom marihønene.

Start på marihøna som har én prikk, og fortsett i stigende rekkefølge etter antall prikker.




Hvilken figur får du?





Oppgave 2



Rufus tenker på et tall.

Tallet er større enn 3, men mindre enn 15.
Det er et partall.
Tallet kan deles i to like oddetall.




Hvilket tall tenker Rufus på?



8	11	12	14
F	R	O	A



Oppgave 3



I et puslespill er alle brikkene like.
Du skal pusle ferdig kamelen.




Hvor mange brikker trenger du?

5	6	7	8
P	G	D	Y

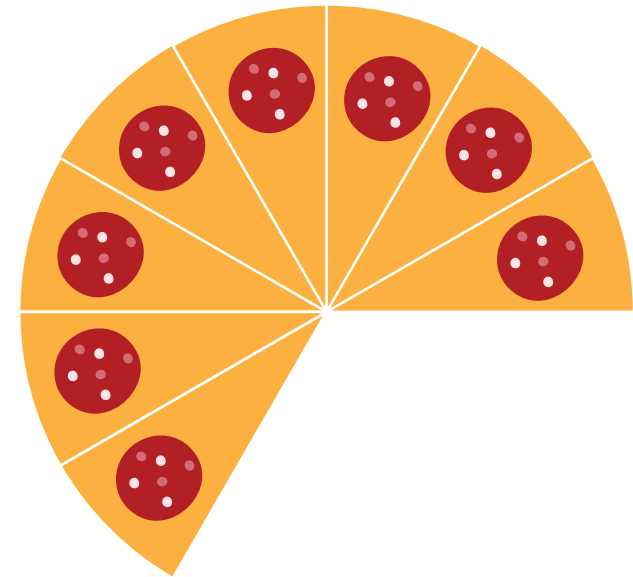


Oppgave 4



Lilly har laget en pizza som hun har delt opp i like store stykker.

Hun spiste noen stykker til middag.




Hvor mange stykker har Lilly spist?


1	4	5	8
H	E	I	N



Oppgave 5



På vektene ligger grønne og rosa kuler.
Kuler med samme farge veier like mye.




Hvor mye veier en rosa kule?

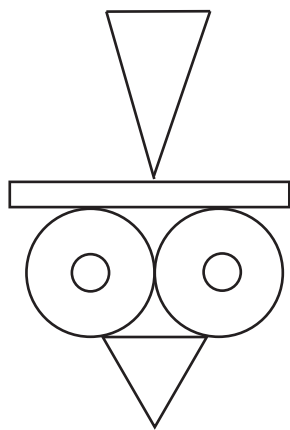
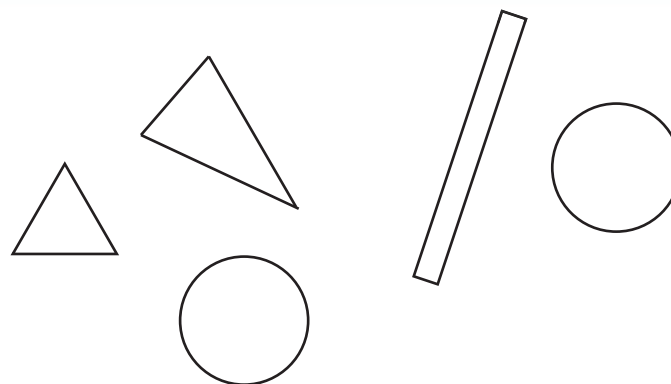
1 kg	3 kg	4 kg	7 kg
T	S	B	R



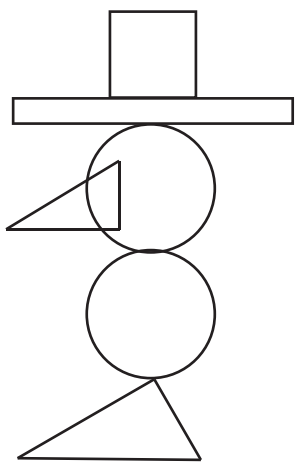
Oppgave 6




Hvilken figur kan du lage med disse fem formene?



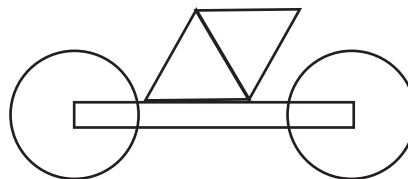
V




J



U




T



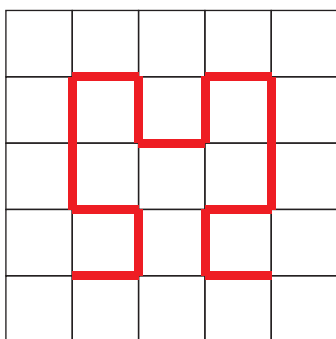
A



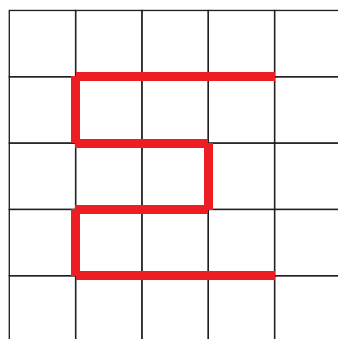
Oppgave 7



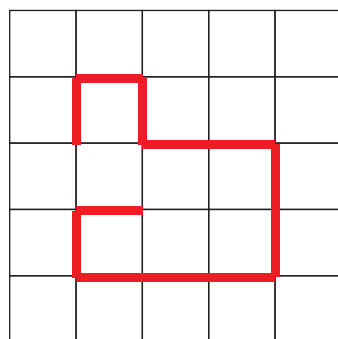
Hvilken vei er lengst?



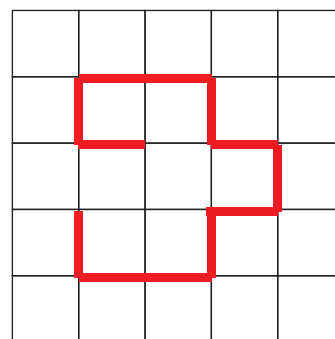
L



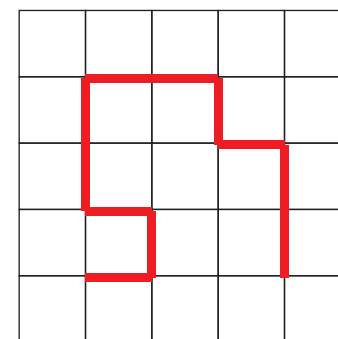
P



S




O



K



Oppgave 8



Koden C3 - C1 - A1 - D4 gir ordet FUGL.



Vaskebjørnen lager en ny kode:
D3 - B2 - D1 - A4

A	B	C	D	
G	S	U	N	1
E	U	M	A	2
T	K	F	H	3
D	O	T	L	4

Hvilket ord gir koden?

MUNN	HEST	HUND	HATT
N	M	L	G