



Julekalender: Kringle



Løysingsord: _____



**Korleis må bitane
liggje for at du skal
få sjå eit heilt reinsdyr?**



1	2
3	4

J

2	1
4	3

A

2	3
4	1

V

2	3
1	4

T



Snømannen Kalle har

- tre knappar
- lue med dusk
- stripete skjerf

Kva for eit bilete viser snømannen Kalle?



A

I

P

D

A



Nora har 12 hesteko.

Alle hestane til Nora skal få nye sko.

Kor mange hestar har Nora?

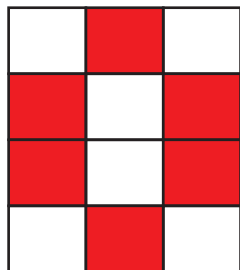
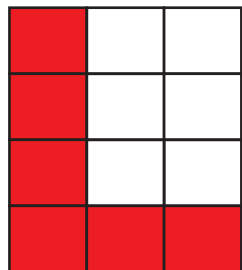

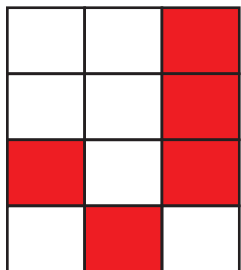


2	3	6	12
N	F	L	R



Rutene som har 2 til svar, skal Maria fargeleggje raude.

Kva for eit bilete får ho?



E

B

N

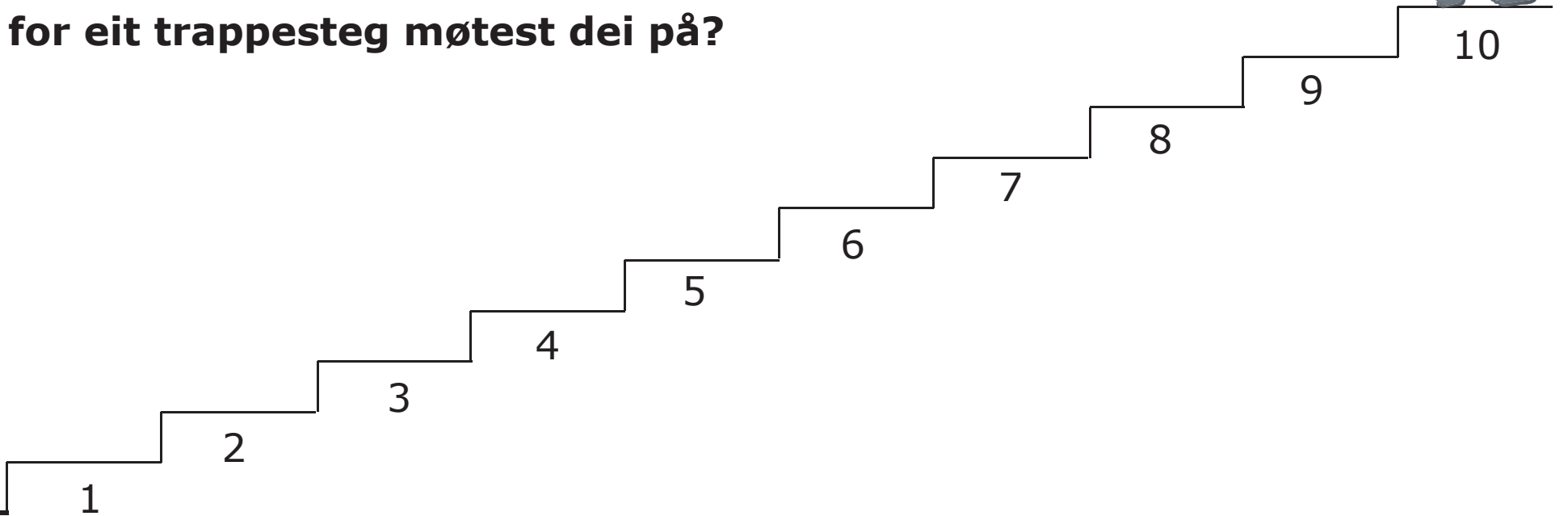
H

$2 - 1$	$1 + 2$	$2 + 0$
$1 + 0$	$3 - 0$	$4 - 2$
$0 + 2$	$2 + 2$	$1 + 1$
$3 - 2$	$2 - 0$	$3 + 1$



Kvar gong nisseguten hoppar tre steg opp trappa, hoppar kaninen to steg ned trappa.

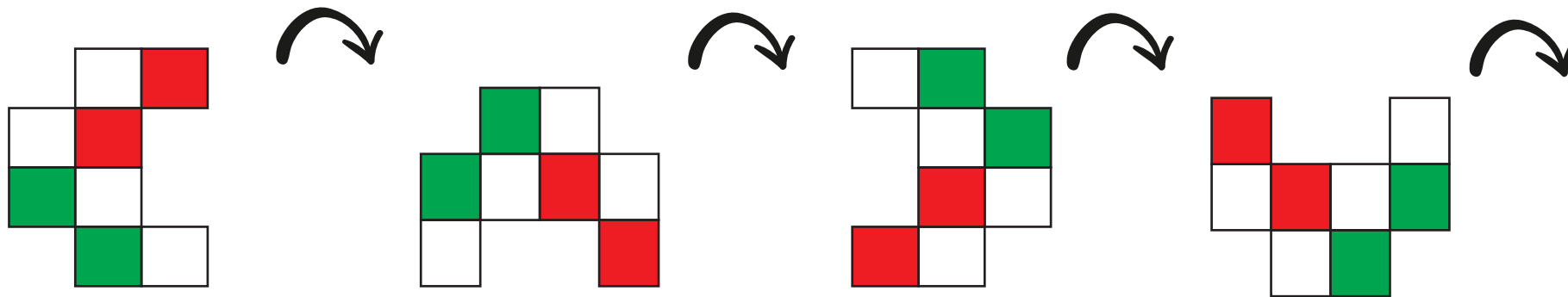
Kva for eit trappesteg møtest dei på?



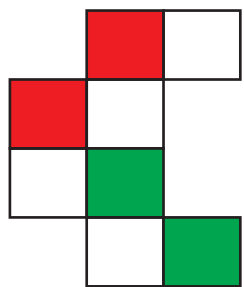
4	5	6	7
S	A	K	E



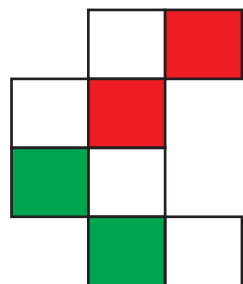
Albert vrir på ein puslespelbit som ligg på bordet.
Her ser du korleis puslespelbiten ser ut når han vrir biten tre gonger.



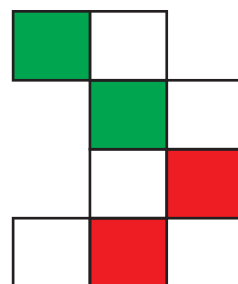
Korleis ser puslespelbiten ut når han vrir biten éin gong til?



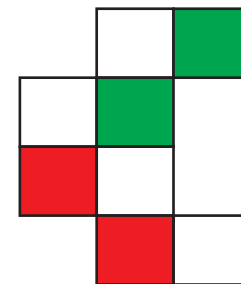
R



K



W



O



Markus lagar par av sokkane.

Kor mange par kan Markus lage?



3	6	7	13
K	D	U	C



I rutene skal tala 1, 2, 3, 4, 5 og 6 stå.
Det skal vere eitt tal i kvar rute.
Summen av dei raude rutene skal vere 10.
Summen av dei blå rutene skal også vere 10.


Kva for eit tal skal stå i den kvite ruta?

Red	Blue	Blue
Red	Red	White


4	3	2	1
P	F	G	E




Emilie byggjer tårn og følgjer eit mønster.



1



2




3

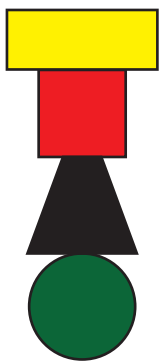
?

4


Korleis ser tårn nummer 4 ut?




L



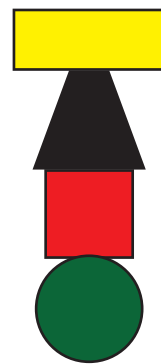
T



U



A



O



12 personer står i denne køen.

Anders står som nummer 7 frammanfrå.
Kim står på andre plass bakanfrå.

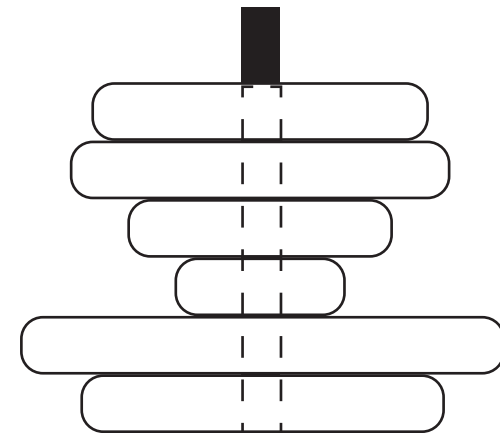
Kor mange står mellom Anders og Kim?

1	3	4	8
V	T	I	Ø




Teodor har bygt eit tårn med ringar.
Han ser på tårnet ovanfrå.

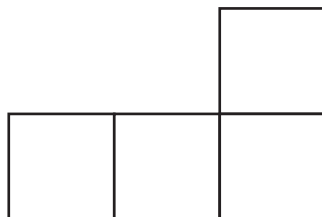
Kor mange ringar kan Teodor sjå?



1	3	5	6
G	I	J	B

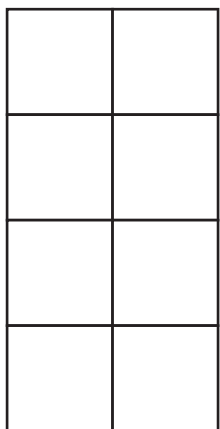


Pedro har to slike puslespelbitar:

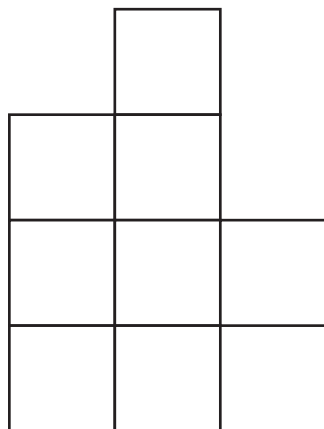


Kva for figurar kan han byggje med dei to bitane?

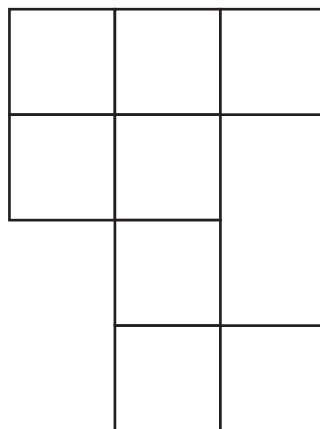
A



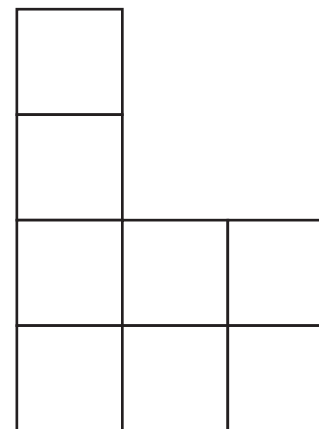
B



C



D



B og D	A, C og D	A, B og C	A, B, C og D
M	Y	Æ	L