




2023




Solstråle 1.-3. trinn



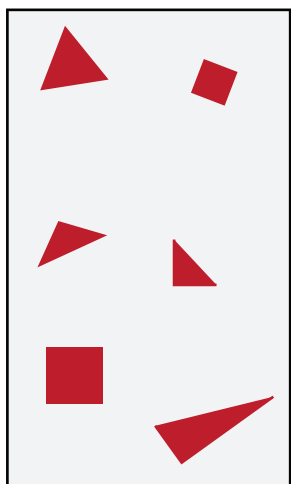
Løysingsord: _____




Opppgåve 1




Kva for eit bilete har 3 trekantar og færre enn 4 kvadrat?



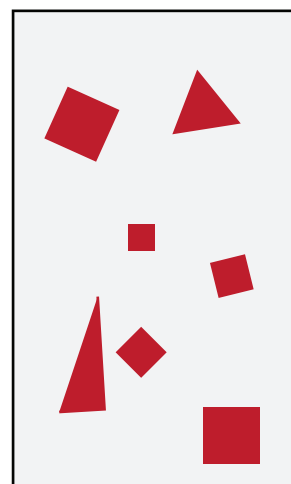
D



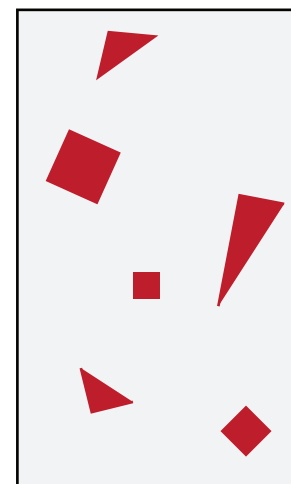
M



T




F



H



Opppgåve 2



Snigelen skal gå til eplet utan å vere innom ruter med steinar.


Kva veg må snigelen gå?

A:  → → ↑ ↑ → → ↑ ↑ ← ← ← 

B:  → → ↑ ↑ ↑ → → → → ↑ → 

C:  → → ↑ → → → → ↑ → ↑ 



D:  → → ↑ ↑ → ↑ ↑ → → → ↓ → 



Veg A	Veg B	Veg C	Veg D
A	O	E	R



Oppgåve 3



Haren har fem kort.
Han skal leggje korta i to esker.


Summen av tala på korta skal vere lik i begge eskene.

Kva for eit kort må haren leggje i den same eska som kortet med talet 4?

Berre kort 3	Berre kort 5	Berre kort 6	Berre kort 5 eller 6	Umogleg å bestemme
L	K	S	B	I




Oppgåve 4




Noah har 4 puslebitar.

Han treng 3 av bitane til puslespelet sitt.



A



B



C




D

Kva for ein bit blir til overs?


A	B	C	D	A eller D
H	T	V	N	G



Oppgåve 5



Eit bilete har blitt knust og er delt opp i fleire bitar.




Kor mange av bitane er firkantar?

2	3	4	5	6
U	I	E	O	Ø



Oppgåve 6



Runde brikker er stabla oppå kvarandre.



Kva for eit bilete viser stabelen sett ovanfrå?




D




P



S




H



R





Opppgåve 7



Reven skal gå den kortaste vegen gjennom labyrinten.




Kva for eit dyr kjem reven til å treffe først?

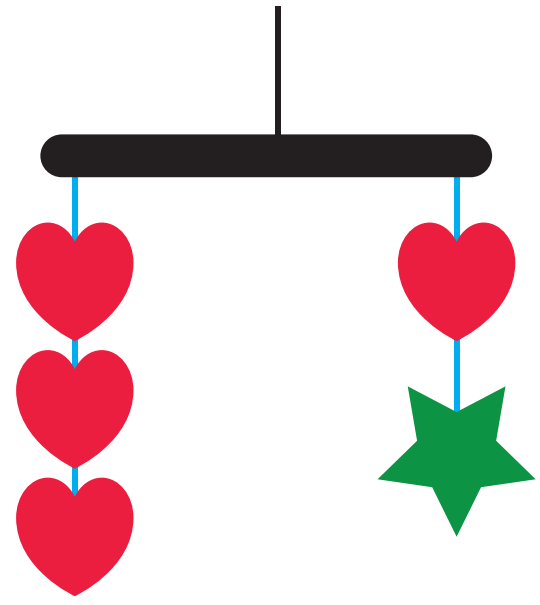




Oppgåve 8



$$\heartsuit = 4$$



Kor mykje veg  ?

2	4	8	12
E	M	V	G