




# 2023




## Solstråle 1.-3. trinn




Løsningsord: \_\_\_\_\_




# Oppgave 1




Hvilket bilde har 3 trekanter og færre enn 4 kvadrater?



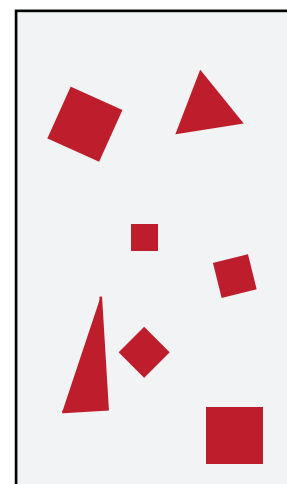
D



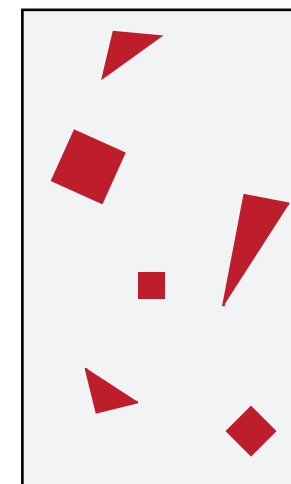
M



T




F



H



# Oppgave 2



Sneglen skal gå til eplet uten å være innom ruter med steiner.


**Hvilken vei må sneglen gå?**

A:  → → ↑ ↑ → → ↑ ↑ ← ← ← 

B:  → → ↑ ↑ ↑ → → → → ↑ → 

C:  → → ↑ → → → → ↑ → ↑ 


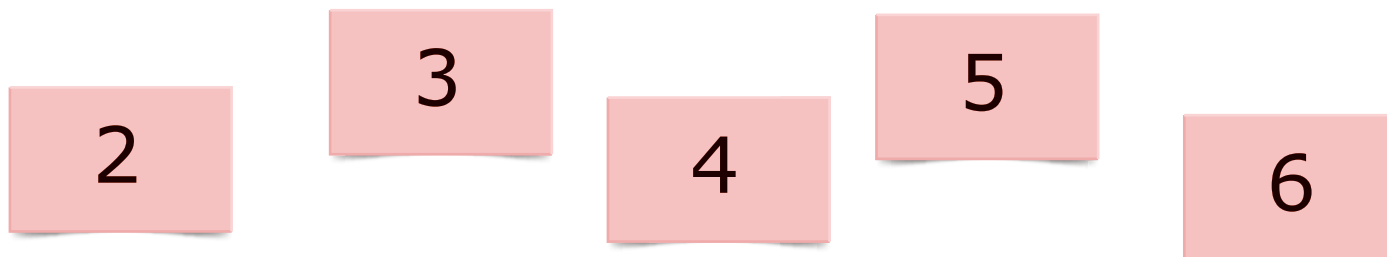

D:  → → ↑ ↑ → ↑ ↑ → → → ↓ → 



Vei A	Vei B	Vei C	Vei D
A	O	E	R



# Oppgave 3



Haren har fem kort.  
Han skal legge kortene i to esker.


Summen av tallene på kortene skal være lik i begge eskene.

**Hvilket kort må haren legge i den samme esken som kortet med tallet 4?**

Bare kort 3	Bare kort 5	Bare kort 6	Bare kort 5 eller 6	Umulig å bestemme
L	K	S	B	I




# Oppgave 4




Noah har 4 puslebiter.

Han trenger 3 av bitene til puslespillet sitt.



**A**



**B**



**C**




**D**

**Hvilken bit blir til overs?**


A	B	C	D	A eller D
H	T	V	N	G



# Oppgave 5



Et bilde har sprukket og blitt delt opp i flere biter.




**Hvor mange av bitene er firkanter?**

2	3	4	5	6
U	I	E	O	Ø



# Oppgave 6



Runde brikker er stablet oppå hverandre.



**Hvilket bilde viser stabelen sett ovenfra?**




D




P



S




H



R





# Oppgave 7



Reven skal gå den korteste veien gjennom labyrinten.




**Hvilket dyr kommer reven til å treffe først?**



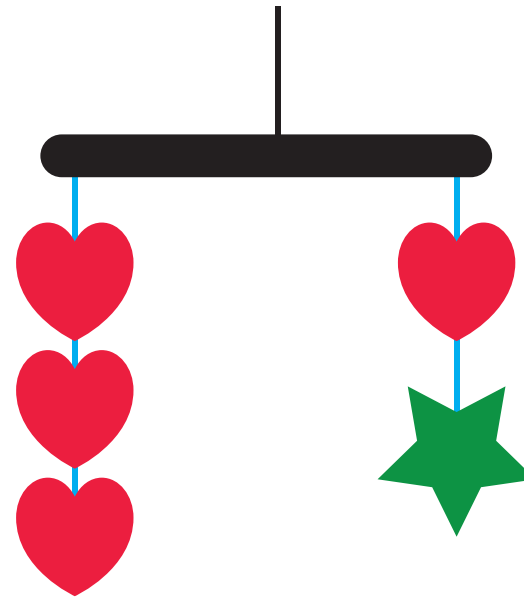





# Oppgave 8



$$\heartsuit = 4$$



Hvor mye veier  ?

2	4	8	12
E	M	V	G